

CCM

STRINGER

18

# LETHBRIDGE HURRICANES



**ZACK  
STRINGER**  
FORWARD

**18**

**SHOOTS:** LEFT

**HEIGHT:** 6'1

**WEIGHT:** 165

**BIRTHDATE:** APRIL 10, 2003

**HOMETOWN:** LETHBRIDGE, AB

**DRAFT:**

WHL - LET (2018) ROUND: 1 (#8)

Stringer finished his first full season with the Hurricanes in March, 2020. Zack appeared in a total of 14 games as a 15-year-old in the 2018-2019 season, netting seven points. The product of Lethbridge, Alberta was awarded the Lethbridge Hurricanes' rookie of the year award soon after the 2019-2020 season was complete, finishing with 34 points as a 16-year-old.



**ZACK STRINGER**





## PENMANSHIP

**INSTRUCTIONS:** Trace the player's name two times for practice, then write it on your own on the blank lines.

18 ZACK STRINGER  
18 ZACK STRINGER

---

---

---

**INSTRUCTIONS:** Trace the player's name two times for practice, then write it on your own on the blank lines.

18 Zack Stringer  
18 Zack Stringer

---

---

---



# FUN FACTS: ZACK STRINGER

RECOMMENDED FOR GRADES 1-4

**INSTRUCTIONS:** Ask your child to answer the same question, or how they relate to it. Children should try to answer in a complete sentence, if possible have them write their answer in the thought bubble.

## Zack Stringer's Answers:

What's your favourite colour?

**My favourite colour  
is blue.**

What's your favourite food?

**My favourite food  
are crepes.**

How old were you when you started hockey?

**I started hockey when I was  
four years old.**

What was your favourite subject in school?

**My favourite subject  
was recess.**

What's your favourite summer sport?

**My favourite summer sport  
is waterskiing.**

## Your Answers:



## INTERVIEW QUESTIONS

RECOMMENDED FOR GRADES 5-7

**INSTRUCTIONS:** Write three or more questions.

For younger kids, it can just be a discussion you have with your child.

**If you interviewed Zack Stringer, what would you ask him?**

---

---

---

## SENTENCE STRUCTURE SOLVERS

RECOMMENDED FOR ALL GRADES

**INSTRUCTIONS:** Fix the grammatical errors in the following sentences.

The last two may be too advanced for younger kids, but try if you'd like!

1. zack stringer is a forward for the lethbridge hurricanes and calls lethbridge home
2. zack represented team alberta at the 2019 canada winter games in red deer alberta
3. in the 2018-2019 season zack is called up by the hurricanes and scored his first whl goal on march 6 against the brandon WHEATkings
4. zack recorded nine points (4 goals, 3 assists) in 4 games at the prestigious Mac's midget aaa world invitational tournament at calgary, alberta in 2019 helping to lead the lethbridge hurricanes midget aaa to silver at the tournament



# MATH QUESTIONS

RECOMMENDED FOR GRADES 1-3

**INSTRUCTIONS:** Solve the math problems below. Show your work!

1. Zack Stringer and his siblings are playing Scrabble. If Zack played his name, how many points would he score?



2. Put the names in order from smallest to biggest based on how much they score in Scrabble. Addison (9), Prefontaine (16), Okuliar (11) and Stringer (9).
3. This season, Zack took 7 shots on goal. Last season, he took 71 shots on goal. How many total shots on goal has he taken with the Lethbridge Hurricanes?
4. Zack played two seasons with the Lethbridge Golden Hawks Bantam AAA and collected 95 points in 61 games. He played two seasons with the Lethbridge Hurricanes Midget AAA and collected 71 points in 53 games. In his first full season with the Lethbridge Hurricanes, and the eight games he played as an affiliate player he collected 38 points in 56 games. At what level of hockey did he collect the most points?



# MATH QUESTIONS

RECOMMENDED FOR GRADES 4-5

**INSTRUCTIONS:** Solve the math problems below. Show your work!

1. The G in Stringer represents 2 points of the total 9 points that the name scores. Represent this in the form of a fraction and decimal. Round to the nearest hundredth.
2. Zack Stringer was born on April 10th, 2003. He was drafted 8th overall in the WHL Bantam Draft on May 3rd, 2018. How many days old was Zack when he was drafted?
3. Zack Stringer has played in the World Selects Invitational 5 times and amassed a career total of 85 points. How many points does Zack average per tournament?
4. Zack Stringer had 11 goals on 71 shots in the 2019-20 season, equal to roughly 1 goal every 6 shots. Use the table below to complete the pattern.

| Shot Attempt | 1 | 2 | 3 | 4 | 5 | 6 | 7 | 8 | 9 | 10 | 11 | 12 | 13 | 14 | 15 | 16 | 17 | 18 |
|--------------|---|---|---|---|---|---|---|---|---|----|----|----|----|----|----|----|----|----|
| Result       | X | X | X | X | X | G | X | X | X | X  | X  | G  | X  | X  | X  |    |    |    |



# MATH QUESTIONS

RECOMMENDED FOR GRADES 6-7

**INSTRUCTIONS:** Solve the math problems below. Show your work!

1. While playing Scrabble, Zack plays his first name horizontally and his last name vertically, crossing at the R in Zackary and the first R in Stringer. In doing so the second A in Zackary hits a double letter tile, the T and the I in Stringer both hit double letter tiles, and the second R in Stringer hits a double word tile. Write an equation to express this using your knowledge of the order of operations.
2. Considering the bonus tiles described in question 1, how much is Zack's name now worth in a game of Scrabble?
3. Zack Stringer has played parts of 6 seasons with three teams since starting Major Bantam. In those six seasons he has recorded 30, 86, 30, 66, 2 and 22 penalty minutes, respectively. Identify the mean, median and mode of Zack's penalty minutes.
4. Consider the algebraic equation below and solve for X.  
$$X + (2X+1) = 34$$



# STRINGER ADDITION

RECOMMENDED FOR GRADES 3-5

**INSTRUCTIONS:** Add Stringer's goals and assists together to find out his points each season.  
Show your work!

|         | SEASON TOTALS |           |
|---------|---------------|-----------|
|         | 2018-2019     | 2019-2020 |
| GOALS   | 1             | 11        |
| ASSISTS | 3             | 23        |
| TOTAL   |               |           |

**INSTRUCTIONS:** Add Stringer's goals and assists together to find out his points each season.  
Show your work!

|       | CAREER TOTALS |       |         |        |
|-------|---------------|-------|---------|--------|
|       | GAMES         | GOALS | ASSISTS | POINTS |
| 2019  | 8             | 1     | 3       |        |
| 2020  | 48            | 11    | 23      |        |
| TOTAL |               |       |         |        |



## FLASH CARDS

RECOMMENDED FOR GRADES 1-3

**INSTRUCTIONS:** For additional math problems and for younger children, print our own Hurricanes Flash Cards from [www.lethbridgehurricanes.com](http://www.lethbridgehurricanes.com) and come up with your own equations that fall in your child's learning objectives.

We encourage parents to stick with the theme of Zack Stringer and use Zack's jersey number in all equations you come up with. This is a suggested additional activity for younger children as the graph and percentage question may be too advanced for children under Grade 4.

**Examples:**

$$6 + 18 = 24$$

or

$$\text{Prefontaine} + \text{Stringer} = \text{Cozens}$$

$$18 - 7 = 11$$

or

$$\text{Stringer} - \text{Arntsen} = \text{Kambeitz}$$

$$35 - 17 = 18$$

or

$$\text{Tetachuk} - \text{Jones} = \text{Stringer}$$







## GRAPHING

RECOMMENDED FOR GRADES 4-7

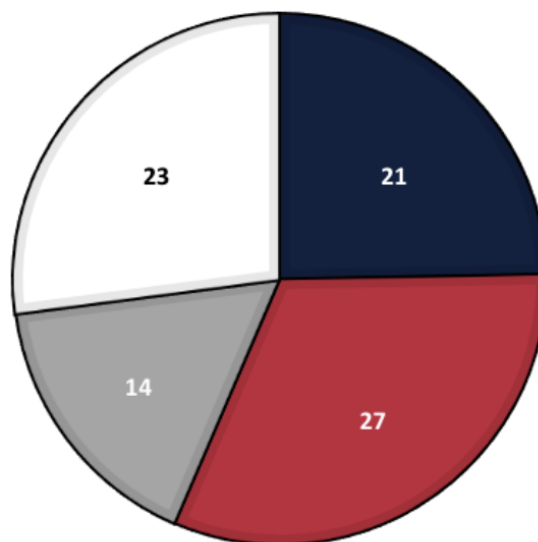
### ZACK STRINGER'S CAREER STATS

| Year    | GP | G  | A  | Pts | +/- | PIM | SOG |
|---------|----|----|----|-----|-----|-----|-----|
| 2018-19 | 8  | 1  | 3  | 4   | 1   | 2   | 7   |
| 2019-20 | 48 | 11 | 23 | 34  | 13  | 22  | 71  |

**INSTRUCTIONS:** Consider the graph provided to answer the following three questions.

### WSI POINTS

■ WSI U12 ■ WSI U13 ■ WSI U14 ■ WSI U15



1 a. How many total points does Zack Stringer have at World Selects Invitational tournaments?

b. Which tournament did Zack score the most points?


c. Zack played 9 games at U12, 9 games at U13, 7 games at U14, and 16 games at U15.  
Arrange his tournaments according to points per game in order of smallest to largest.



## GRAPHING CONTINUED

RECOMMENDED FOR GRADES 4-7

2. In the graphing space provided, graph Zack Stringer's games played, goals, assists and points stats from both the 2018-19 and 2019-20 seasons.



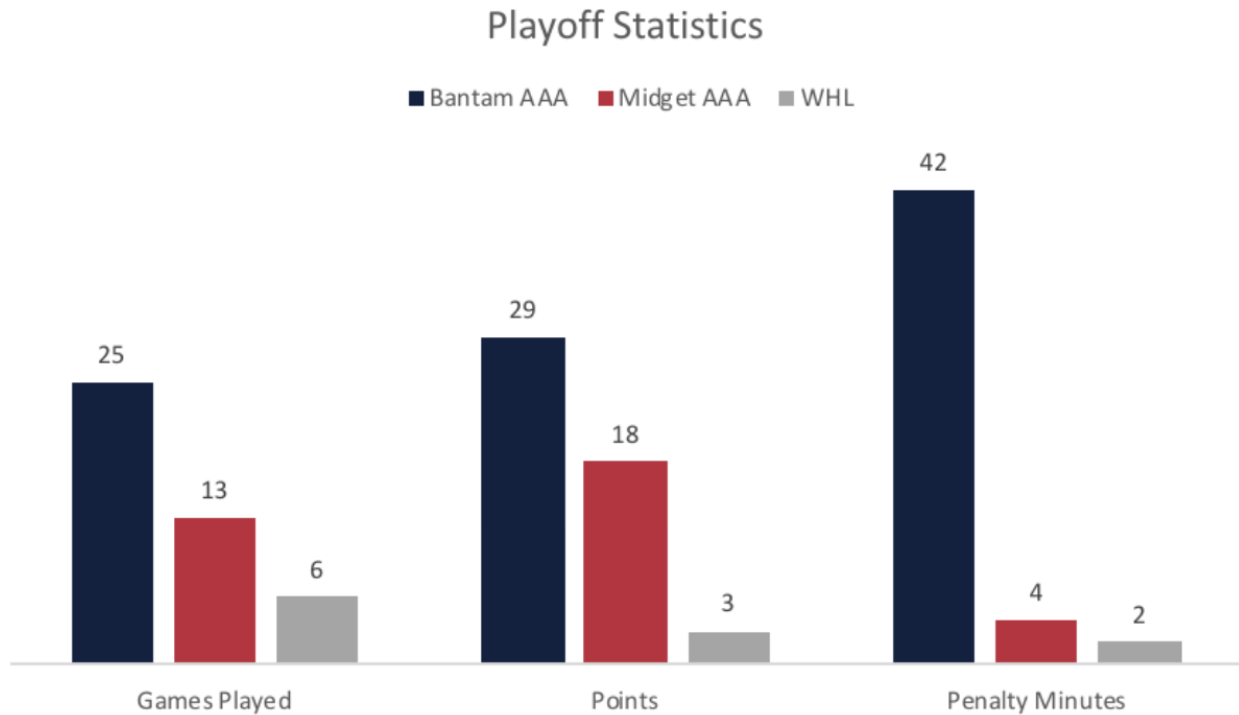
- a. Which type of graph is best suited for this data?
- b. Was Zack's points per game value greater or smaller in the 2019-20 season, and by how much?
- c. How many games would Zack have had to play in the 2018-19 season to match his points total from the 2019-20 season?



## GRAPHING CONTINUED

RECOMMENDED FOR GRADES 4-7

3. Consider the graph provided when answering the following three questions.



- a. At which level did Zack Stringer have the highest points per game average?
- b. If the Hurricanes had played 18 games in the 2019-20 playoffs, how many career playoff points would Zack have needed to reach in order to increase his WHL Playoffs Pts/Gm value from 0.50 to 1.25?
- c. How many times larger is Zack's Bantam AAA penalty minutes total than his Midget AAA penalty minutes total?



## PRACTICING PERCENTAGES

RECOMMENDED FOR GRADES 6-7

**INSTRUCTIONS:** Refer to Zack Stringer's stats chart for the following questions.  
Round the decimal to the nearest hundredth.

- 1. Zack Stringer was called up for eight games in the 2018-19 season and registered 4 points. In the 2019-20 season Zack registered 34 points. What percentage of Zack's career WHL points came in the 2018-19 season?**
- 2. Zack Stringer scored 45 goals in Bantam AAA, 31 goals in Midget AAA, and so far 12 goals in the WHL. What percentage of his career goals came at the Midget AAA level?**
- 3. In the 2018-19 season Zack Stringer finished third on his Midget AAA team in points with 41. Michael Horon finished first on that team with 61 points. However, since reaching the WHL Zack has recorded 38 points while Michael has only recorded 13. What percentage of Michael Horon's points did Zack Stringer have at the Midget AAA and WHL levels, respectively?**
- 4. In the 2019-20 season Zack Stringer played in 48 of the Hurricanes' 63 games. What percentage of the team's games did Zack play in?**



## WORD SEARCH

S A T V K V W A I Z K D J B P H W V R B  
Z X L Z Z F I I F Z W J G S I X W B W L  
D A D C U O L L C V M F G B Y L D D S U  
K L C Q H V B K I R W I R N V D K G E E  
R F U K Z K C F U A G A W M D V G D Z C  
J G H W A T E R S K I I N G F V R Y X I  
U A R A S N V A S T R E C E S S J B C J  
I Q X N P H G G B J W Y U L N T J K V K  
Z G O W D A U C F G S E S V N T D B M J  
D V A K J R H R P Y A K S E U X Z B Q J  
Z E C U Q S A G R G V C U I H L U M S I  
T B Z Q O P P W I I A O R K E E A J Q Q  
E O H I S L G S R Q C H L J H T R G P W  
H M X K Q V T V R O R A N R N H B O H Y  
J F M Z N R C M P E F X N S T B Z Z C W  
S J E B I A E T K B G L E E V R Q G H Y  
J W I N A T R E B L A P O R S I D L W F  
E H G M V A X K G U E A C I B D Z I Q L  
X E O D P W I X I R R F R Y L G O B W V  
R D H P K D G X C C O R A D P E K M A M

ALBERTA

BLUE

CREPES

FORWARD

HOCKEY

HURRICANES

LETHBRIDGE

RECESS

STRINGER

WATERSKIING

ZACK



## ANSWER KEY

### SENTENCE STRUCTURES

1. Zack Stringer is a forward for the Lethbridge Hurricanes and calls Lethbridge home.
2. Zack represented Team Alberta at the 2019 Canada Winter Games in Red Deer, Alberta.
3. In the 2018-2019 season, Zack was called up by the Hurricanes and scored his first WHL goal on March 6 against the Brandon Wheat Kings.
4. Zack recorded nine points (four goals, three assists) in four games at the prestigious Mac's Midget AAA World Invitational Tournament in Calgary, Alberta in 2019. He helped lead the Lethbridge Hurricanes Midget AAA to silver at the tournament.

### MATH QUESTIONS

#### PAGE 6

##### RECOMMENDED FOR GRADES 1-3

1. 34 points
  2. Addison, Stringer, Okuliar, Prefontaine
  3. 78 shots
  4. Bantam AAA
- 

#### PAGE 7

##### RECOMMENDED FOR GRADES 4-5

1.  $2/9$ , 0.22
  2. 15 years (5475 days) + 4 leap days + 23 extra calendar days = 5,502 days old
  3.  $85/5 = 17$  points
  4. X, X, G
- 

#### PAGE 8

##### RECOMMENDED FOR GRADES 6-7

1.  $(10+1+3+5+(2 \times 1)+1+4) + 2(1+(2 \times 1)+1+(2 \times 1)+1+2+1+1)$
2.  $26 + 22 = 48$  points
3. 39.33, 30, & 30
4. 
$$\begin{array}{r} X + (2X+1) = 34 \\ \quad -1 \quad -1 \\ \hline X + 2X = 33 \\ 3X = 33 \\ \text{Divide both sides by 3} \\ X = 11 \end{array}$$



## ANSWER KEY

### GRAPHING

#### PAGE 11

##### RECOMMENDED FOR GRADES 4-7

- 1 a. **85 goals**
  - 1 b. **WSI U13**
  - 1 c. **U15 (1.44), U14 (2.00), U12 (2.33), U13 (3.00)**
- 

#### PAGE 12

##### RECOMMENDED FOR GRADES 4-7

- 2 a. **Double bar graph**
  - 2 b.  **$4/8 = 0.50$ ,  $34/48 = 0.71$ ,  $0.71 - 0.50 = 0.21$ . Greater by 0.21 points per game**
  - 2 c.  **$Gm \times 0.50\text{pts/gm} = 34\text{pts}$   
Divide both sides by 0.50  
 $Gm = 68$**
- 

#### PAGE 13

##### RECOMMENDED FOR GRADES 4-7

- 3 a. **Midget AAA (1.38)**
- 3 b.  **$(6+18) \times 1.25 = 30$**
- 3 c.  **$42/4 = 10.5$**

### PERCENTAGES

#### PAGE 14

##### RECOMMENDED FOR GRADES 4-7

- 1.  **$4/38 = 0.105 \rightarrow 11\%$**
- 2.  **$31/88 = 0.35 \rightarrow 35\%$**
- 3.  **$41/61 = 0.67 \rightarrow 67\%$ ,  $38/13 = 2.92 \rightarrow 292\%$**
- 4.  **$48/63 = 0.76 \rightarrow 76\%$**